

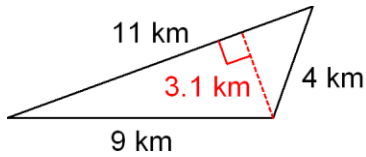
Name: _____ Period: _____ Date: _____

Worksheet 12-1
Area & Perimeter

Unit 12

Find the area and perimeter of each figure.

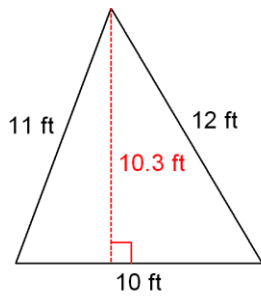
1.



Area: _____

Perimeter: _____

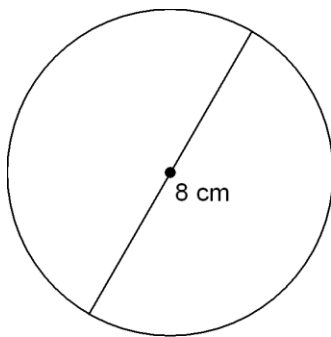
2.



Area: _____

Perimeter: _____

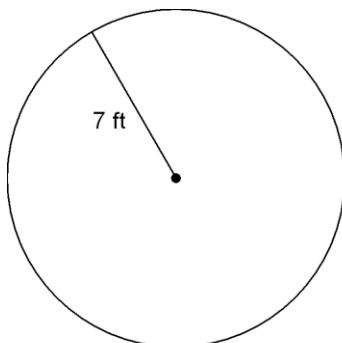
3.



Area: _____

Circumference: _____

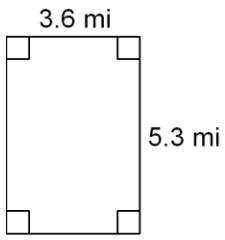
4.



Area: _____

Circumference: _____

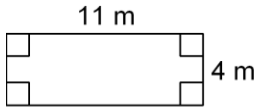
5.



Area: _____

Perimeter: _____

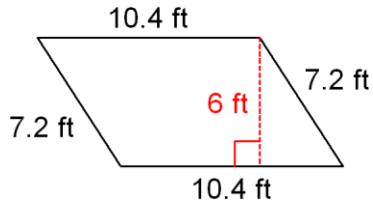
6.



Area: _____

Perimeter: _____

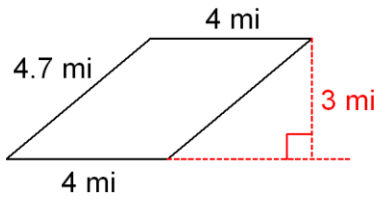
7.



Area: _____

Perimeter: _____

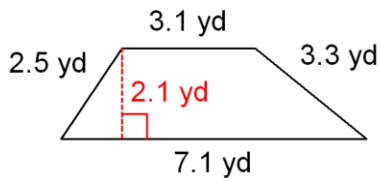
8.



Area: _____

Perimeter: _____

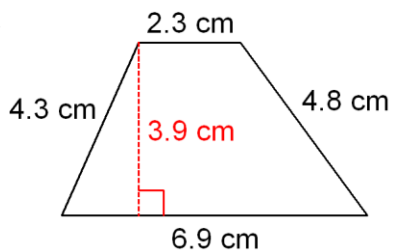
9.



Area: _____

Perimeter: _____

10.



Area: _____

Perimeter: _____